

Name _____

Second Grade

Snow

Day

Work

Day #3

Walnut Ridge Elementary

Alternative Method of Instruction Verification Form

Day 1 _____ **Day 2** _____ **Day 3** **Day 4** _____ **Day 5** _____

This form certifies that your child completed work for the designated day. This will allow your child to receive attendance credit for this day. In the event it is not completed, your child will receive an unexcused absence.

My child, _____ completed all work assigned for Day _____.

My child also worked on the following website:

_____.

Parent's Signature _____ **Date** _____

Bridges to Remember

Read to find out what is special about these bridges.


¹ Some people do not like to drive across bridges. They look straight ahead and try to hold their breath until they get to the other side. Good luck if those people are driving in Louisiana. There is a 24-mile-long bridge there! It takes about half an hour to get across.

² If you like to look way, way down when you cross a bridge, you should go to Colorado.

A bridge there stands more than a thousand feet above a river. A 75-story building could fit under that bridge!

³ If you do not like to look down, get in the middle lane of a bridge in Australia. It has eight lanes for cars, two train tracks, a bike path, and a sidewalk.

⁴ Finally, if you like crowds and bridges, go to India. A bridge there carries 100,000 cars and trucks every day, plus thousands of walkers.



1. How does the text help you understand how long a 24-mile-long bridge is?

2. How does the text help you understand how high the bridge in Colorado is?

3. If you do not like to look over the side of a bridge, why would the bridge in Australia be a good one to cross?

4. Why is the bridge in India a bridge to remember?

5. Name three things, other than cars, that cross bridges in the selection.




6. What do some people do if they are nervous on a bridge?

Vowel Pairs

Directions: Read each word in the box. Circle its vowel pair. Use each word to complete the riddle. Print the answers on the line.

drain	feel	slow	boat	rainbow
toes	bleed	tail	green	neat
doe	dream	hay		


1. A dog can wag its _____.
2. A horse eats _____.
3. In a tub, water goes down a _____.
4. If you get cut, you will _____.
5. When you sleep, you _____.
6. Mix blue and yellow to get _____.
7. Use your fingers to _____.
8. It is not messy, but _____.
9. Each foot has five _____.
10. A female deer is a _____.
11. Something that floats is a _____.
12. After a storm, you might see a _____.
13. A turtle is not fast, but _____.



Words Ending in le

Directions: Say the name of each picture. Circle its name.

1.



rattle

rapper

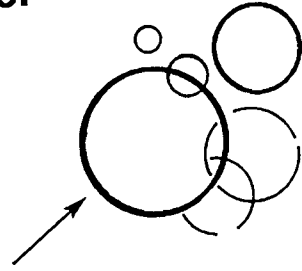
2.



candle

candy

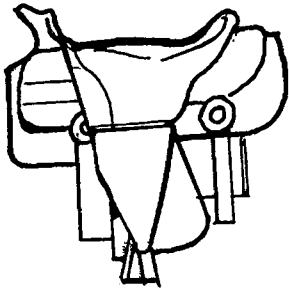
3.



bottle

bubble


4.



sadly

saddle


5.



bottle

bother


6.



castle

cattle


7.



middle

mitten


8.



nook

noodle


9.



beagle

better


10.



ladder

ladle


11.



castle

cattle

12.



handle

happy

Name _____

2-Digit Addition
No Regrouping

7



$$\begin{array}{r} 25 \\ + 63 \\ \hline \end{array}$$

$$\begin{array}{r} 51 \\ + 14 \\ \hline \end{array}$$

$$\begin{array}{r} 62 \\ + 17 \\ \hline \end{array}$$

$$\begin{array}{r} 12 \\ + 63 \\ \hline \end{array}$$

$$\begin{array}{r} 34 \\ + 53 \\ \hline \end{array}$$


$$\begin{array}{r} 50 \\ + 12 \\ \hline \end{array}$$

$$\begin{array}{r} 42 \\ + 26 \\ \hline \end{array}$$

$$\begin{array}{r} 11 \\ + 25 \\ \hline \end{array}$$

$$\begin{array}{r} 74 \\ + 15 \\ \hline \end{array}$$

$$\begin{array}{r} 32 \\ + 37 \\ \hline \end{array}$$



$$\begin{array}{r} 61 \\ + 21 \\ \hline \end{array}$$

$$\begin{array}{r} 86 \\ + 12 \\ \hline \end{array}$$

$$\begin{array}{r} 40 \\ + 35 \\ \hline \end{array}$$

$$\begin{array}{r} 75 \\ + 14 \\ \hline \end{array}$$

$$\begin{array}{r} 27 \\ + 31 \\ \hline \end{array}$$



Time: _____

Score: _____ / _____

1. The first part of the document discusses the importance of maintaining accurate records of all transactions and activities. It emphasizes that this is essential for ensuring transparency and accountability in the organization's operations.

2. The second part of the document outlines the various methods and tools used to collect and analyze data. It highlights the need for consistent and reliable data collection processes to ensure the validity of the findings.

3. The third part of the document describes the results of the data analysis and the key findings. It identifies several trends and patterns that have emerged from the data, which are discussed in detail in the following sections.

4. The fourth part of the document provides a detailed analysis of the data, including a breakdown of the results by category and a comparison of the findings with previous studies. This analysis helps to contextualize the results and identify areas for further research.

5. The final part of the document concludes with a summary of the key findings and a discussion of the implications for the organization. It offers recommendations for how the organization can use the insights gained from the data to improve its performance and achieve its strategic goals.

Name _____ Date _____

Two-Digit Subtraction

Total Problems: 27
Problems Correct: _____

Solve each problem.

Use Your Subtraction Tools!

1. $\begin{array}{r} 61 \\ -41 \\ \hline \end{array}$

2. $\begin{array}{r} 39 \\ -26 \\ \hline \end{array}$

3. $\begin{array}{r} 85 \\ -43 \\ \hline \end{array}$

4. $\begin{array}{r} 56 \\ -31 \\ \hline \end{array}$

5. $\begin{array}{r} 47 \\ -17 \\ \hline \end{array}$

6. $\begin{array}{r} 87 \\ -45 \\ \hline \end{array}$

7. $\begin{array}{r} 67 \\ -52 \\ \hline \end{array}$

8. $\begin{array}{r} 78 \\ -33 \\ \hline \end{array}$

9. $\begin{array}{r} 69 \\ -46 \\ \hline \end{array}$

10. $\begin{array}{r} 96 \\ -21 \\ \hline \end{array}$

11. $\begin{array}{r} 94 \\ -71 \\ \hline \end{array}$

12. $\begin{array}{r} 40 \\ -20 \\ \hline \end{array}$

13. $\begin{array}{r} 70 \\ -20 \\ \hline \end{array}$

14. $\begin{array}{r} 98 \\ -31 \\ \hline \end{array}$

15. $\begin{array}{r} 58 \\ -18 \\ \hline \end{array}$

16. $\begin{array}{r} 38 \\ -15 \\ \hline \end{array}$

17. $\begin{array}{r} 65 \\ -12 \\ \hline \end{array}$

18. $\begin{array}{r} 88 \\ -62 \\ \hline \end{array}$

19. $\begin{array}{r} 26 \\ -24 \\ \hline \end{array}$

20. $\begin{array}{r} 70 \\ -20 \\ \hline \end{array}$

21. $\begin{array}{r} 82 \\ -51 \\ \hline \end{array}$

22. $\begin{array}{r} 62 \\ -20 \\ \hline \end{array}$

23. $\begin{array}{r} 98 \\ -34 \\ \hline \end{array}$

24. $\begin{array}{r} 88 \\ -12 \\ \hline \end{array}$

25. $\begin{array}{r} 45 \\ -35 \\ \hline \end{array}$

26. $\begin{array}{r} 67 \\ -45 \\ \hline \end{array}$

27. $\begin{array}{r} 19 \\ -15 \\ \hline \end{array}$

